

Name: _____ Score: _____

A – Integer Ordering and Operations Concept Check

Perform the following operations. Please use the number line to show your work.

1. $-3 - 7$

2. $8 - (-3)$


Answer Column

1) _____

2) _____




3. $-2 - (-9)$




4. $9 - 6$

3) _____

4) _____



5. $-4 - (-4)$



6. $1 - 2$

5) _____

6) _____

