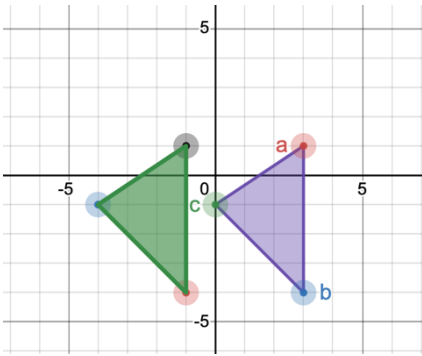


Name: _____

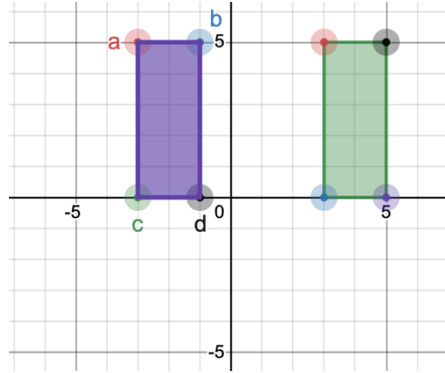
Score: _____

A – Naming Images and Angles Concept Check

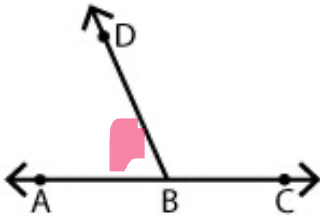
1. Name the image.



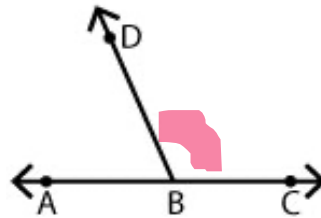
2. Name the image.



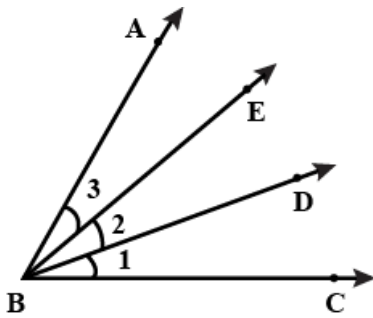
3. Name the angle.



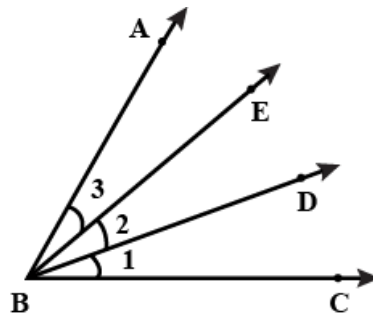
4. Name the angle.



5. Name angle 2.



6. Name angle 3.



Answer Key

1. On graph

2. On graph

3. _____

4. _____

5. _____

6. _____